

**Name:**

**Roll no:**

**I. Answer the following questions.**

**3x2=6 m**

## 1. Do you follow good manners?

A: \_\_\_\_\_

2. Were the sons able to break just a single stick?

A: \_\_\_\_\_

### 3. How long does it sing?

A: \_\_\_\_\_

## II. Fill in the blanks:

**3x1=3m**

1. It sings and plays in \_\_\_\_\_ water.

2. But they always \_\_\_\_\_.

3. \_\_\_\_\_ is the Capital of west Bengal.

### III. Match the opposite words:

**4x1=4m**

1. Old bad

2. Good out

3. in enemy

4. Friend                      young

#### IV. Circle the Odd one out.

**3x1=3m**

1. Green      yellow      colour      white

2. Merry      happy      sad      joy

3. frog                  tortoise                  fish                  elephant

**V. Tick(✓) on the pictures in each row whose name does not begin With the given letters. 4x1=4m**

$$4 \times 1 = 4 \text{ m}$$

FL



Ba



Gi



Ap



Y. M  
Class- 1<sup>st</sup>  
Name:

Formative Assessment-IV  
Sub: Maths  
Roll no:

Time: 45min  
Marks: 20

**I. Word problems:**

**2x2=4m**

1. Distribute RS.756 equally among 4 boys?
2. Divide 153 by 10.


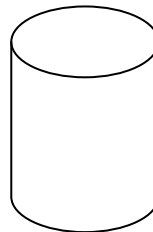

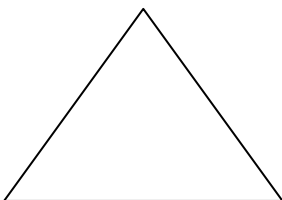
**II. Write short, shorter, Shortest:**

**3x1=3m**



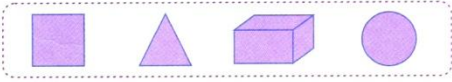
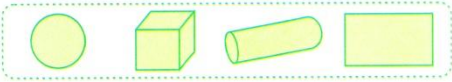
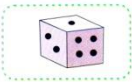
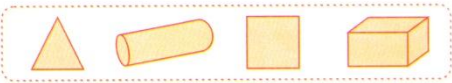

**III. Name the following Shapes:**

**4x1=4m**




**IV . Tick (✓) the correct shape the object.**

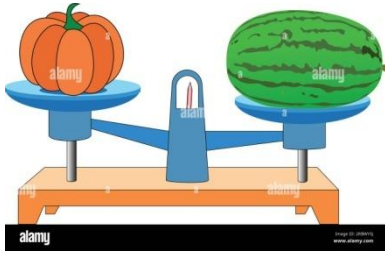
**5x1=5m**



**V. Fill in the blanks with 'heavier' or 'Lighter':**      **2x2=4m**



The watermellon is \_\_\_\_\_ than the orange



The pumpkin is \_\_\_\_\_ than the watermellon

**Y. M**  
**Class- 1<sup>st</sup>**

**Formative Assessment-IV**  
**Sub: EVS**

**Time: 45min**  
**Marks: 20**

**Name:**

**Roll no:**

**I. Answer the following questions.**

**3x2=6m**

1. What do you mean by punctual?

A: \_\_\_\_\_

2. Where should you keep yourself left?

A: \_\_\_\_\_

3. From where rivers originate?

A: \_\_\_\_\_

**II. Fill in the blanks.**

**4x1=4m**

1. We dig \_\_\_\_\_ to get underground water.

2. I cross the \_\_\_\_\_ at a Zebra crossing.

3. I keep my room \_\_\_\_\_.

4. I do not go out for \_\_\_\_\_ alone.

**III. Tick (✓) the correct option.**

**4x1=4m**

1. Which is the biggest source of water body?

a) sea ☐ b) ocean ☐ c) Lake ☐ d) pond ☐

2. We should not touch \_\_\_\_\_.

a) Crayons ☐ b) pencil box ☐

c) Electric appliances ☐ d) none of these ☐

3. I say \_\_\_\_\_ morning in the morning.

a) good ☐ b) better ☐ c) best ☐ d) all ☐

4. I do not pass through \_\_\_\_\_ light.

a) red ☐ b) green ☐ c) yellow ☐

**IV. Write 'T' for true 'F' for false.**

**4x1=4m**

1. I do not wait for my turn.

☐

2. Big Seas are known as 'Oceans'.

☐

3. I wish my parents and teachers.

☐

4. We get water from ten sources.'

☐

**V. Write any two Good habits:**

**2x1=2m**

1.

2.



Name: \_\_\_\_\_

Roll no: \_\_\_\_\_

**I. Answer the following questions.**

3x2=6m

1. What is the golden rule?

A: \_\_\_\_\_

2. Who said that the elephant was like a fan?

A: \_\_\_\_\_

3. What did the third man say?

A: \_\_\_\_\_

**II. Fill in the blanks:**

3x1=3m

1. The tusk was \_\_\_\_\_ and \_\_\_\_\_.

2. All that you do, do with all your \_\_\_\_\_.

3. There was an \_\_\_\_\_ in front of the temple.

**III. Write the plurals of these words:**

4x1=4m

1. elder \_\_\_\_\_


2. fan \_\_\_\_\_

3. elephant \_\_\_\_\_


4. Snake \_\_\_\_\_

**IV. Look at the pictures and fill in the correct words:**

2x1<sup>1/2</sup>=3m



\_\_\_\_\_ is kept on the table?



\_\_\_\_\_ Elephants are there?

**V. Tick (✓) the correct option.**

4x1=4m

1. The sixth blind man touched the \_\_\_\_\_.

a) tail ☐ b) tusk ☐ c) trunk ☐

2. We should do \_\_\_\_\_ thing at a time.

a) One ☐ b) many ☐ c) none ☐

3. Things done by halves, are

a) Wrong ☐ b) right ☐ c) both ☐

4. How many men went to a temple?

a) Ten ☐ b) Five ☐ c) six ☐

**Y. M**  
**Class- 2<sup>nd</sup>**

**Formative Assessment-IV**  
**Sub: Maths**

**Time: 45min**  
**Marks: 20**

**Name:**

**Roll no:**

**I. Solve these word problems:**

**4m**

1. Pooja bought a doll for ₹ 70 and a top for ₹ 17. How much money Did she spend in all?
2. How many bought 3 kg 50g rice. He used 2 kg from it. How much Rice is left?

**II. Which is the better unit (m or cm ) to measure these?**

**3m**



The height of a Ladder \_\_\_\_\_



The length of a table \_\_\_\_\_



The length of your toy gun \_\_\_\_\_

**III. Tick ( √ ) the heavier objects:**

**4m**

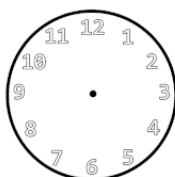
☐☐☐☐

**IV. Draw the hands of the clock as per given time:**

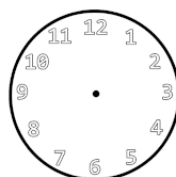
**4m**



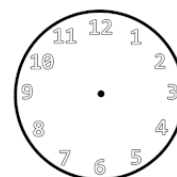
4:00



1: 30



9:00



6:30

**V. Tick (✓) the correct option.**

**5m**

1. The short hand indicates time in \_\_\_\_\_.

- a) minutes ☐      b) hour ☐      c) seconds ☐

2. 1 kilogram \_\_\_\_\_.

- a) 250 gram ☐      b) 1000 gram ☐      c) 100 gram ☐

3. How many hours are there in a day?

- a) 24 ☐      b) 36 ☐      c) 12 ☐

4. How many paise make 1 rupee?

- a) 50 ☐      b) 100 ☐      c) 75 ☐

5. How many ₹ 5 coins you will get for a ₹ 80?

- a) 12 ☐      b) 16 ☐      c) 18 ☐

**Y. M**  
**Class- 2<sup>nd</sup>**

**Formative Assessment-IV**  
**Sub: EVS**

**Time: 45min**  
**Marks: 20**

**Name:**

**Roll no:**

**I. Answer the following questions.**

**3x2=6m**

1. What is water conservation?

A: \_\_\_\_\_

2. Name the methods of water purification?

A: \_\_\_\_\_

3. What do festivals bring in our life?

A: \_\_\_\_\_

**II. Fill in the blanks.**

**4x1=4m**

1. Boiling kills most of the diseases-causing \_\_\_\_\_.

2. We must be \_\_\_\_\_ while using water.

3. We decorate our \_\_\_\_\_ on festivals.

4. Dirty water makes us weak and \_\_\_\_\_.

**III. Tick (✓) the correct option.**

**3x1=3m**

1. Turn off the \_\_\_\_\_ after using it.

a) gate ☐ b) bed ☐ c) cycle ☐ d) tap ☐

2. We want to \_\_\_\_\_ in life.

a) sleep ☐ b) weep ☐ c) play ☐ d) enjoy ☐

3. We celebrate many festivals in a \_\_\_\_\_.

a) day ☐ b) week ☐ c) month ☐ d) year ☐

**IV. Match the following:**

**5x1=5m**

Holi	a) Harvest festival
Diwali	b) After completion of holy month Ramzan
Baisakhi	c) Festival of colours
Christmas	d) Festival of lights
Ed-ul-Fitr	e) Birthday of Jesus Christ

**IV. Write 'T' for true 'F' for false.**

**2x1=2m**

1. We should drink clean water.

☐

2. Madhu's studies lives in a village of Odisha

☐

Name: \_\_\_\_\_

Roll no: \_\_\_\_\_

**I. Answer the following questions.**

3x2=6m

1. What is the golden rule?

A: \_\_\_\_\_

2. Who said that the elephant was like a fan?

A: \_\_\_\_\_

3. What did the third man say?

A: \_\_\_\_\_

**II. Fill in the blanks:**

3x1=3m

1. The tusk was \_\_\_\_\_ and \_\_\_\_\_.

2. All that you do, do with all your \_\_\_\_\_.

3. There was an \_\_\_\_\_ in front of the temple.

**III. Write the plurals of these words:**

4x1=4m

1. elder \_\_\_\_\_


2. fan \_\_\_\_\_

3. elephant \_\_\_\_\_


4. Snake \_\_\_\_\_

**IV. Look at the pictures and fill in the correct words:**

2x1<sup>1/2</sup>=3m



\_\_\_\_\_ is kept on the table?



\_\_\_\_\_ Elephants are there?

**V. Tick (✓) the correct option.**

4x1=4m

1. The sixth blind man touched the \_\_\_\_\_.

a) tail ☐ b) tusk ☐ c) trunk ☐

2. We should do \_\_\_\_\_ thing at a time.

a) One ☐ b) many ☐ c) none ☐

3. Things done by halves, are

a) Wrong ☐ b) right ☐ c) both ☐

4. How many men went to a temple?

a) Ten ☐ b) Five ☐ c) six ☐

**Y. M**  
**Class- 2<sup>nd</sup>**

**Formative Assessment-IV**  
**Sub: Maths**

**Time: 45min**  
**Marks: 20**

**Name:**

**Roll no:**

**I. Solve these word problems:**

**4m**

1. Pooja bought a doll for ₹ 70 and a top for ₹ 17. How much money Did she spend in all?
2. How many bought 3 kg 50g rice. He used 2 kg from it. How much Rice is left?

**II. Which is the better unit (m or cm ) to measure these?**

**3m**



The height of a Ladder \_\_\_\_\_



The length of a table \_\_\_\_\_



The length of your toy gun \_\_\_\_\_

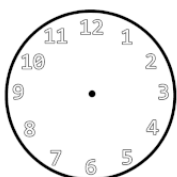
**III. Tick ( √ ) the heavier objects:**

**4m**

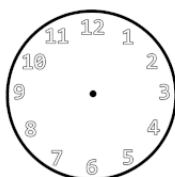
☐☐☐☐

**IV. Draw the hands of the clock as per given time:**

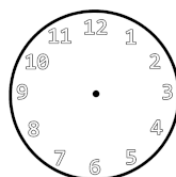
**4m**



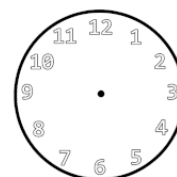
4:00



1: 30



9:00



6:30

**V. Tick (✓) the correct option.**

**5m**

1. The short hand indicates time in \_\_\_\_\_.

- a) minutes ☐      b) hour ☐      c) seconds ☐

2. 1 kilogram \_\_\_\_\_.

- a) 250 gram ☐      b) 1000 gram ☐      c) 100 gram ☐

3. How many hours are there in a day?

- a) 24 ☐      b) 36 ☐      c) 12 ☐

4. How many paise make 1 rupee?

- a) 50 ☐      b) 100 ☐      c) 75 ☐

5. How many ₹ 5 coins you will get for a ₹ 80?

- a) 12 ☐      b) 16 ☐      c) 18 ☐

**Y. M**  
**Class- 2<sup>nd</sup>**

**Formative Assessment-IV**  
**Sub: EVS**

**Time: 45min**  
**Marks: 20**

**Name:**

**Roll no:**

**I. Answer the following questions.**

**3x2=6m**

1. What is water conservation?

A: \_\_\_\_\_

2. Name the methods of water purification?

A: \_\_\_\_\_

3. What do festivals bring in our life?

A: \_\_\_\_\_

**II. Fill in the blanks.**

**4x1=4m**

1. Boiling kills most of the diseases-causing \_\_\_\_\_.

2. We must be \_\_\_\_\_ while using water.

3. We decorate our \_\_\_\_\_ on festivals.

4. Dirty water makes us weak and \_\_\_\_\_.

**III. Tick (✓) the correct option.**

**3x1=3m**

1. Turn off the \_\_\_\_\_ after using it.

a) gate ☐ b) bed ☐ c) cycle ☐ d) tap ☐

2. We want to \_\_\_\_\_ in life.

a) sleep ☐ b) weep ☐ c) play ☐ d) enjoy ☐

3. We celebrate many festivals in a \_\_\_\_\_.

a) day ☐ b) week ☐ c) month ☐ d) year ☐

**IV. Match the following:**

**5x1=5m**

Holi	a) Harvest festival
Diwali	b) After completion of holy month Ramzan
Baisakhi	c) Festival of colours
Christmas	d) Festival of lights
Ed-ul-Fitr	e) Birthday of Jesus Christ

**IV. Write 'T' for true 'F' for false.**

**2x1=2m**

1. We should drink clean water.

☐

2. Madhu's studies lives in a village of Odisha

☐

**Y. M**  
**Class- 3<sup>rd</sup>**

**Formative Assessment-IV**  
**Sub: English**

**Time: 45min**  
**Marks: 20**

**Name:**

**Roll no:**

---

**I. Answer the following questions.**

**3x2=6m**

1. How did the doctor examine Arun?

A: \_\_\_\_\_

2. What is dusk?

A: \_\_\_\_\_

3. What had happened to Arun?

A: \_\_\_\_\_

**II. Fill in the blanks:**

**3x1=3m**

1. The birds rest on the \_\_\_\_\_.

2. His whole body was \_\_\_\_\_.

3. The tall trees have heads in the \_\_\_\_\_.

**III. Write the following words in their short form:**

**3x1=3m**

1. Do + not = \_\_\_\_\_

2. You + will = \_\_\_\_\_

3. They + are = \_\_\_\_\_

**IV. Rewrite the following sentences using 'don't':**

**3x1=3m**

1. Bite nails \_\_\_\_\_

2. Throw waste papers \_\_\_\_\_

3. Jump on the bed \_\_\_\_\_

**V. Match the opposites:**

**5x1=5m**

Night

short

Safe

come

Tall

day

Down

unsafe

Go

up

Y. M  
Class- 3<sup>rd</sup>

Formative Assessment-IV  
Sub: Maths

Time: 45min  
Marks: 20

Name: \_\_\_\_\_

Roll no: \_\_\_\_\_

**I. Solve these word problems:**

2x2=4m

1. One doll costs ₹ 26.75. How much will 5 dolls cost?

2. ₹ 94 - ₹ 76.58

**II. Write the time shown below:**

4x1=4m



**III. Write the following in words:**

4x1=4m

1. ₹ 35.50 \_\_\_\_\_

2. ₹ 5 \_\_\_\_\_

3. ₹ 8.50 \_\_\_\_\_

4. ₹ 12.75 \_\_\_\_\_

**IV. Tick (✓) the correct period of time:**

4x1=4m

- |                                 |                |
|---------------------------------|----------------|
| a) To finish your studies       | years / months |
| b) Going out of station         | days / months  |
| c) For a seed to become a plant | weeks / days   |
| d) To change a season           | days / months  |

**V. Fill in the blanks:**

4x1=4m

- The \_\_\_\_\_ hand takes 12 hours to go around the clock once.
- \_\_\_\_\_ 50 rupee coins make 50 rupees.
- 25 rupees and 70 paise is written as \_\_\_\_\_
- Learn a lesson \_\_\_\_\_ [ 2 min / 2 hours]

**Y. M**  
**Class- 3<sup>rd</sup>**  
**Name:**

**Formative Assessment-IV**  
**Sub: Science**  
**Roll no:**

**Time: 45min**  
**Marks: 20**

**I. Answer the following questions.**

**3x2=6m**

1. What are the three forms of water?

A: \_\_\_\_\_

2. Name two movements of the earth.

A: \_\_\_\_\_

3. How are solids different from liquids?

A: \_\_\_\_\_

**II. Fill in the blanks.**

**3x1=3m**

1. Our earth is \_\_\_\_\_ in shape.

2. All \_\_\_\_\_ things are made from natural materials.

3. \_\_\_\_\_ is a natural material.

**III. Write two examples each of the following:**

**2x2=4m**

1. Movements of the earth \_\_\_\_\_

2. Things found on the planet earth \_\_\_\_\_

**IV. Write the meanings:**

**4x1=4m**

1. Matter =

2. Atmosphere =

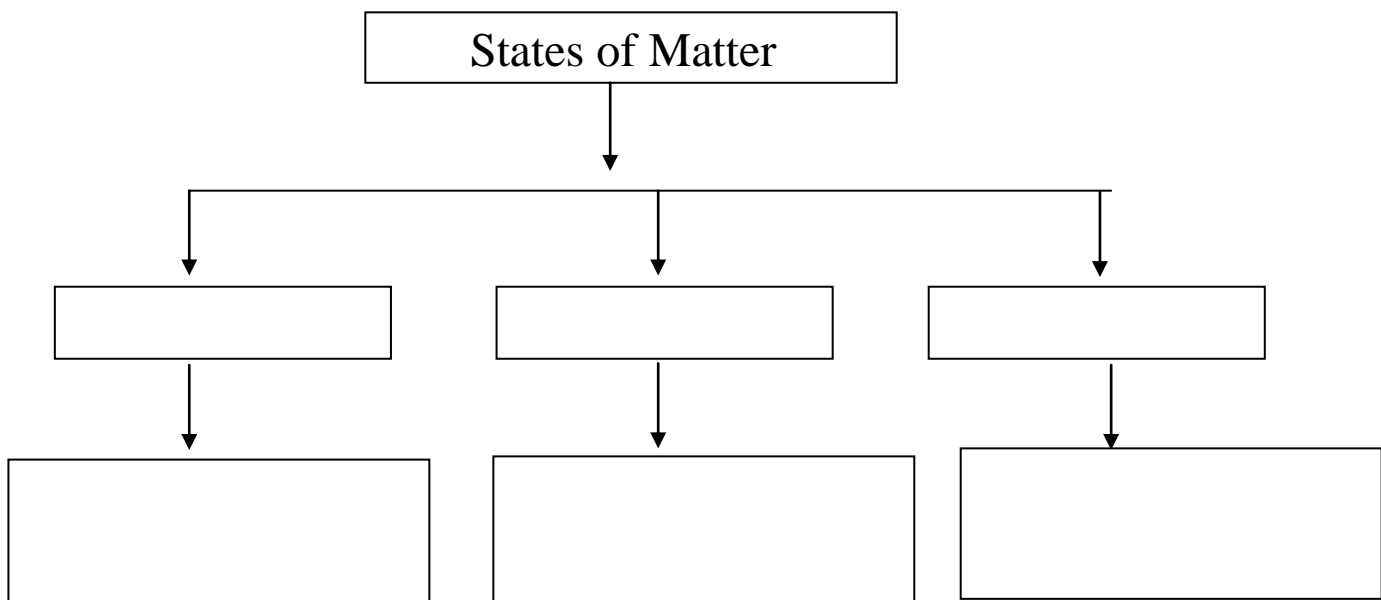
3. Rotation =

4. Water vapour =

**V. Complete the table:**

**3x1=3m**

States of Matter



Name: \_\_\_\_\_

Roll no: \_\_\_\_\_

**I. Answer the following questions.**

**4x2=8m**

1. Name five tourist places in Delhi.

A: \_\_\_\_\_

2. How is the climate of Chennai?

A: \_\_\_\_\_

3. What are the people of Kolkata fond of ?

A: \_\_\_\_\_

4. Name the languages spoken in Mumbai.

A: \_\_\_\_\_

**II. Fill in the blanks.**

**4x1=4m**

1. The prime Minister's office is in the \_\_\_\_\_.

2. A town called \_\_\_\_\_ has a big fertiliser plant.

3. Durga puja is celebrated for \_\_\_\_\_ days.

4. The Gateway of India was built in \_\_\_\_\_.

**III. Tick (✓) the correct option.**

**3x1=3m**

1. \_\_\_\_\_ is the dry and hot wind which blows in summer.

a) Loo ☐ b) Breeze ☐ c) Wind ☐ d) Storm ☐

2. Which is the most famous dance of Chennai?


a) Carnatic ☐ b) kathak ☐ c) Bharatnatyam ☐ d) Bhangra ☐

3. What new name is given to Howrah Bridge?

a) Vidyasagar Setu ☐ b) Rabindra setu ☐  
c) Shastri Bridge ☐ c) Nambi ☐

**IV. Look at the picture and write their names:**

**3x1=3m**



**IV. Write 'T' for true 'F' for false.**

**2x1=2m**

1. The Samadhi of Gandhiji is at Raj Ghat. ☐

2. Kolkata is also an important centre of education. ☐



**Y. M**  
**Class- 4<sup>th</sup>**

**Formative Assessment-IV**  
**Sub: English**

**Time: 45min**  
**Marks: 20**

**Name:**

**Roll no:**

---

**I. Answer the following questions.**

**3x2=6m**

1. What did the tree complain?

A: \_\_\_\_\_

2. Was Birbal clever? How?

A: \_\_\_\_\_

3. What will happen if we follow this advice?

A: \_\_\_\_\_

**II. Fill in the blanks:**

**3x1=3m**

1. The \_\_\_\_\_ was the judge of the court.

2. The man was on his way home from a \_\_\_\_\_.

3. A little less of \_\_\_\_\_.

**III. Change the following sentences into Interrogatives: 3x1=3m**

1. The postman brings our letters. ( Who)

\_\_\_\_\_

2. The train leaves at 6 O' clock. ( when)

\_\_\_\_\_

3. The birds made the complaint.

\_\_\_\_\_

**IV. Write the following pairs of sentences using 'and'. 2x2=4m**

1. You are selfish. You are crule,too.

\_\_\_\_\_

2. The bear later joined the court. The giraffe,too,later joined the court.

\_\_\_\_\_

**V. Match the opposite words:**

**4x1=4m**

Last                      bottom

Slow                     wrong

Top                      first

Right                    fast

Y. M  
Class- 4<sup>th</sup>  
Name:

Formative Assessment-IV  
Sub: Maths  
Roll no:

Time: 45min  
Marks: 20

**I. Word problems:**

**2x2=4m**

- 1 kg of Onion costs ₹ 45.50. Find the cost of 12kg of Onions.
- The annual examination in a school started on April 3 and ended on April 28. How long did the examination continue?

**II. Convert each of the following amounts into paise.**

**4x1=4m**

- a) ₹ 331.42                      b) ₹ 1.01

**b) Each of the following amounts in figures:**

- i) Rupee one and sixty-four paise \_\_\_\_\_
- ii) Rupees One hundred six and fifteen paise. \_\_\_\_\_.

**III. Read the clocks and fill in the blanks:**

**2x2=4m**

- a) The time is \_\_\_\_\_ minutes past \_\_\_\_\_.



The time is \_\_\_\_\_ minutes to \_\_\_\_\_

It is written as

- b) The time is \_\_\_\_\_ minutes past \_\_\_\_\_.



The time is \_\_\_\_\_ minutes to \_\_\_\_\_.

It is written as

**IV. Divide the money.**

**2x2=4m**

1. ₹ 108.72 by 12
2. ₹ 80.70 by 2

**V. Fill in the blanks:**

**4x1=4m**

1. 12 o' clock night is \_\_\_\_\_.
2. 30 min = \_\_\_\_\_ seconds.
3. The sun sets at 5: 45 [am/pm] = \_\_\_\_\_.
4. A leap year has \_\_\_\_\_ days.

**Y. M**  
**Class- 4<sup>th</sup>**

**Formative Assessment-IV**  
**Sub: Science**

**Time: 45min**  
**Marks: 20**

**Name:**

**Roll no:**

**I. Answer the following questions.**

**3x2=6m**

1. What makes the soil fertile?

A: \_\_\_\_\_

2. How are clouds formed?

A: \_\_\_\_\_

3. Describe the causes of soil erosion.

A: \_\_\_\_\_

**II. Fill in the blanks.**

**3x1=3m**

1. We should plant \_\_\_\_\_ to stop soil erosion.

2. Land gets heated \_\_\_\_\_ than the water.

3. Dew is formed on \_\_\_\_\_ nights.

**III. Tick (✓) the correct option.**

**3x1=3m**

1. Water can be purified by \_\_\_\_\_ on big scales.

a) Boiling ☐

b) chlorination ☐

2. Water covers \_\_\_\_\_ of the Earth's surface.

a)  $\frac{3}{4}$  th ☐

b)  $\frac{3}{5}$ <sup>th</sup> ☐

3. Acid rain contains \_\_\_\_\_ gases.

a) harmful ☐

b) useful ☐

**IV. Write two examples each of the following:**

**4x1=4m**

1. Things we get from the sun \_\_\_\_\_, \_\_\_\_\_

2. Cause of water pollution \_\_\_\_\_, \_\_\_\_\_

3. Natural resources \_\_\_\_\_, \_\_\_\_\_

4. Layers of soil \_\_\_\_\_, \_\_\_\_\_

**V. Complete the chart:**

**4x1=4m**

Agents of Soil erosion



**Y. M**  
**Class- 4<sup>th</sup>**  
**Name:**

**Formative Assessment-IV**  
**Sub: Social**  
**Roll no:**

**Time: 45min**  
**Marks: 20**

**I. Answer the following questions.**

**4x2=8m**

1. Which is the most literate state in India?

A: \_\_\_\_\_

2. Where is the lotus Temple located?

A: \_\_\_\_\_

3. How many spokes are there in Ashoka's Chakra?

A: \_\_\_\_\_

4. Name any great Indian astronomer.

A: \_\_\_\_\_

**II. Fill in the blanks.**

**3x1=3m**

1. We have \_\_\_\_\_ Schools of Indian music.

2. Freedom fighters were kept in the \_\_\_\_\_ jail.

3. The word 'Vande Matram means' \_\_\_\_\_.

**III. Tick (✓) the correct option.**

**3x1=3m**

1. Buddhism was founded by \_\_\_\_\_.

a) Lord jain ☐ b) Mahavir ☐

c) Vishnuji ☐ d) Gautam Buddha ☐

2. Which is an additional official language?

a) English ☐ b) Hindi ☐ c) Urdu ☐ d) Assamese ☐

3. Which is the southernmost tip of India?

a) Mangaluru ☐ b) Marina beach ☐

c) Thiruvananthapuram ☐ d) Kanyakumari ☐

**IV. Write the meanings:**

**3x1=3m**

1. dialect =

2. Satyameva jayate =

3. Aryabhatta =

**V. Long answer questions:**

**1x3=3m**

1. What are the main Occupations of people in Odisha?

**Y. M**  
**Class- 5<sup>th</sup>**

**Formative Assessment-IV**  
**Sub: English**

**Time: 45min**  
**Marks: 20**

**Name:**

**Roll no:**

**I. Answer the following questions.**

**3x2=6m**

1. What suggestion was given to the wolf?

A: \_\_\_\_\_

2. How can we make the world a happier place?

A: \_\_\_\_\_

3. What answer did Ganesh give for the reduction of food grains?

A: \_\_\_\_\_

**II. Tick (✓) the correct option.**

**3x1=3m**

1. The crane was \_\_\_\_\_.

a) wise ☐ b) experienced ☐ c) both ☐

2. A word can never be \_\_\_\_\_.

a) said ☐ b) recalled ☐ c) dead ☐

3. Shiva took \_\_\_\_\_ baskets of food grains.

a) 2 ☐ b) 5 ☐ c) 10 ☐

**III. Change the following sentences into passive voice: 4x1=4m**

1. The farmer ploughs the field.

\_\_\_\_\_

2. I see a tiger.

\_\_\_\_\_

3. Amit plays football.

\_\_\_\_\_

4. She reads a book.

\_\_\_\_\_

**IV. Underline the verbs in the following sentences: 3x1=3m**

1. He saw his heap of food grains.

2. Ganesha left the field.

3. Both shiva and Ganesha always reaped a good harvest.

**V. Arrange the letters of these words to make new words:4m**

1. God \_\_\_\_\_.
2. now \_\_\_\_\_.
3. Once \_\_\_\_\_.
4. Loop \_\_\_\_\_.

**Y. M**  
**Class- 5<sup>th</sup>**

**Formative Assessment-IV**  
**Sub: Maths**

**Time: 45min**  
**Marks: 20**

**Name:**

**Roll no:**

---

**I. Solve the problems:**

**3x2=6m**

1. Pooja writes 3600 words in 6 minutes. How many words can She write in 540 seconds?
2. The train was to leave as 8:15 p.m. It was late by 1 hour 45min. What time did it leave?
3. The cost of 7 oranges is ₹ 49. What is the cost 13 oranges?

**II. Convert into degree Celsius:**

**2x2=4m**

1.  $77^{\circ}\text{F}$
- 2)  $167^{\circ}\text{F}$

**III. Write in decimal nation:**

**4x1=4m**

- a) 245 p      b) 6 p      c) 97 p      d) 62 p

**IV.Fill in the blanks:**

**4x1=4m**

1. There are \_\_\_\_\_ equal division on Celsius Scale.
2. 800 minutes = \_\_\_\_\_ hours \_\_\_\_\_ minutes.
3. The boiling point of water is \_\_\_\_\_
4. 28 seconds – 9 seconds = \_\_\_\_\_

**V. Divide the following:**

**1x2=2m**

- a) ₹ 108 and  $72\text{ p} \div 12$

**Y. M**  
**Class- 5<sup>th</sup>**

**Formative Assessment-IV**  
**Sub: Science**

**Time: 45min**  
**Marks: 20**

**Name:**

**Roll no:**

**I. Answer the following questions.**

**3x2=6m**

1. How are metamorphic rocks rocks formed?

A: \_\_\_\_\_

2. What are the characteristics of a shadow?

A: \_\_\_\_\_

3. Explain the soli profile.

A: \_\_\_\_\_

**II. Fill in the blanks.**

**3x1=3m**

1. Earthworms live in \_\_\_\_\_ to maintain fertility.

2. \_\_\_\_\_ objects do not from shadows.

3. The action of the \_\_\_\_\_, \_\_\_\_\_ and \_\_\_\_\_ affects the  
Formation of rocks.

**III. Write two examples each of the following:**

**4x1=4m**

1. Non-metallic minerals \_\_\_\_\_

2. Opaque objects \_\_\_\_\_

3. Sedimentary rocks \_\_\_\_\_

4. Luminous objects \_\_\_\_\_

**IV. Write the meanings:**

**4x1=4m**

1. Igneous rocks =

2. Eclipse =

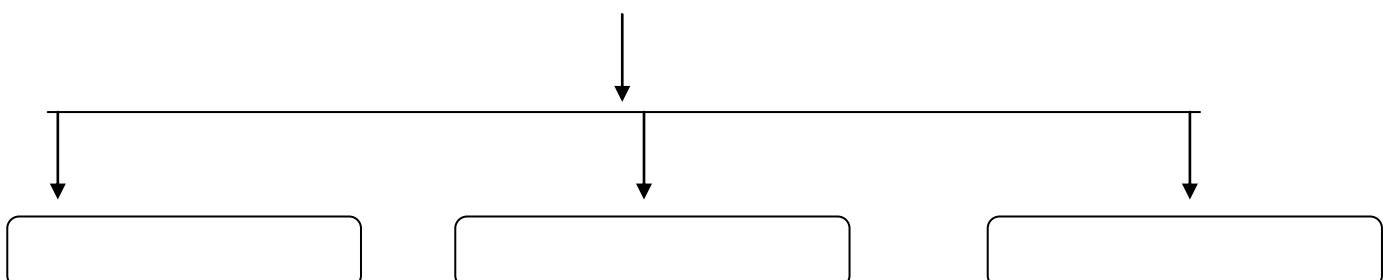
3. Soil erosion =

4. Rock cycle =

**V. Complete the chart:**

**3x1=3m**

**Method of Soil Conservation**



**Y. M**  
**Class- 5<sup>th</sup>**

**Formative Assessment-IV**  
**Sub: Social**

**Time: 45min**  
**Marks: 20**

**Name:**

**Roll no:**

**I. Answer the following questions.**

**3x2=6m**

1. When was Abraham Lincoln elected as the president of the USA?

A: \_\_\_\_\_

2. How will you define UN?

A: \_\_\_\_\_

3. Name the permanent members of the Security Council.

A: \_\_\_\_\_

**II. Fill in the blanks.**

**4x1=4m**

1. The \_\_\_\_\_ was launched by Mahatma Gandhi in 1942.

2. Olive \_\_\_\_\_ symbolise peace.

3. Each members of ECOSOC is elected for \_\_\_\_\_ years.

4. The real name of Mother Teresa was \_\_\_\_\_.

**III. Write the Full forms of the following:**

**3x1=3m**

1. I L O : \_\_\_\_\_

2. U N I C E F : \_\_\_\_\_

3. F A O : \_\_\_\_\_

**IV. Tick (✓) the correct option.**

**3x1=3m**

1. When did water powered spinning jenny invent?

a) 1950 ☐      b) 1980 ☐      c) 20<sup>th</sup> century ☐

2. The idea of karl Marx's gave birth to the \_\_\_\_\_

a) Democracy ☐      b) communism ☐      c) federalism ☐

3. The Human Rights Day is celebrated on \_\_\_\_\_.

a) 24 Oct ☐      b) 24<sup>th</sup> Nov ☐      c) 10<sup>th</sup> Dec ☐

**V. Write the meanings:**

**4x1=4m**

1. Father of nation:

2. United Nations:

3. Democracy:

4. Security council :

/