

Y. M  
Class- 1<sup>st</sup>  
Name:

Formative Assessment-II  
Sub: English  
Roll no:

Time: 45min  
Marks: 20

**I. Answer the following questions.**

**3x2=6m**

1. Do you go to school every day?

A: \_\_\_\_\_

2. What idea did one of the mice give?

A: \_\_\_\_\_

3. Where did the hare take the lion?

A: \_\_\_\_\_

**II. Fill in the blanks.**

**4x1=4m**

1. The lion was angry with the \_\_\_\_\_.

2. The cat moved very \_\_\_\_\_ and \_\_\_\_\_.

3. I learn to \_\_\_\_\_ and \_\_\_\_\_ here.

4. There was plenty of \_\_\_\_\_ in the shop.

**III. Tick (✓) the correct answer.**

**3x1=3m**

1. Where do we have the playground?

a) In the house ☐ b) In the school ☐ c) Both ☐

2. What did the grocer bring one day?

a) A lion ☐ b) A cage ☐ c) A cat ☐

3. Who was clever?

a) Lion ☐ b) Hare ☐ c) Both ☐

**IV. Complete the following.**

**4x<sup>1/2</sup>=2m**


Male	Female	Baby
Lion		Cub
	Mare	Colt
	Cow	Calf
Ram	Eve	

**II. Match the following.**


**5x1=5m**



a) den



b) kennel



c) stable



d) burrow



e) shed

Y. M  
Class- 2<sup>nd</sup>  
Name:

Formative Assessment-II  
Sub: English  
Roll no:

Time: 45min  
Marks: 20

**I. Answer the following questions.**

**3x2=6m**

1. Which axe did the Goddess bring first?

A: \_\_\_\_\_

2. Was the lamb saved?

A: \_\_\_\_\_

3. What did the dove drop near the ant?

A: \_\_\_\_\_

**II. Tick (✓) the correct answer.**

**3x1=3m**

1. What fell in the river?

a) Book ☐      b) Leaf ☐      c) Axe ☐

2. Which instrument did the wolf play?

a) Tabla ☐      b) Mouth Organ ☐      c) Flute ☐

3. Who saved the ant's life?

a) Dove ☐      b) Hunter ☐      c) A boy ☐

**III. Encircle the correct word.**

**3x1=3m**

1. Plants absorb water from their roots/routes.

2. They one/won the match.

3. There are ate/eight mangoes in the basket.

**IV. Fill in the blanks.**

**3x1=3m**

1. He started \_\_\_\_\_.

2. The \_\_\_\_\_ and the \_\_\_\_\_ heard the sound.

3. A \_\_\_\_\_ came there.

**V. Write 'a', 'an' or 'the' in the boxes.**

**5x1=5m**



**Y. M**  
**Class- 3<sup>rd</sup>**  
**Name:**

**Formative Assessment-II**  
**Sub: English**  
**Roll no:**

**Time: 45min**  
**Marks: 20**

**I. Answer the following questions.**

**3x2=6m**

1. Where do the ships sail?

A: \_\_\_\_\_

2. How did the crane carry the crab?

A: \_\_\_\_\_

3. Who was not very clever?

A: \_\_\_\_\_

**II. Tick (✓) the correct answer.**

**3x1=3m**

1. What sails on the seas?

a) Ships ☐    b) Boats ☐    c) Both ☐

2. The pond was:

a) Drying ☐    b) full of water ☐    c) both ☐

3. Was the crocodile actually dead?

a) Yes ☐    b) No ☐    c) Half-dead ☐

**III. Correct the words and re-write them.**

**3x1=3m**

1. Heaone \_\_\_\_\_

2. Riveer \_\_\_\_\_

3. Briges \_\_\_\_\_

**IV. Change these sentences from plural to singular.**

**3x1=3m**

1. There are bridges on the rivers \_\_\_\_\_

2. Children like mangoes \_\_\_\_\_

3. The boats sail on the rivers \_\_\_\_\_

**V. Match the naming words.**

**5x1=5m**

**Naming Words**

**Action words**

1. Water

a) rise

2. Sun

b) see

3. Food

c) fly

4. Eyes

d) eat

5. Bird

e) drink

**Y. M**  
**Class- 4<sup>th</sup>**

**Formative Assessment-II**

**Sub: English**

**Time: 45min**

**Marks: 20**

**Name:**

**Roll no:**

**I. Answer the following questions.**

**3x2=6m**

1. Why could Midas not sleep at night?

A: \_\_\_\_\_

2. Why did the grandmother drop her bowl of rice?

A: \_\_\_\_\_

3. Who gives green leaves to the trees?

A: \_\_\_\_\_

**II. Tick (✓) the correct answer.**

**3x1=3m**

1. Midas' \_\_\_\_\_ turned into gold.

a) Son ☐ b) daughter ☐ c) wife ☐

2. Who taught parents a lesson?

a) Grandmother ☐ b) Rohit ☐ c) Grandfather ☐

3. Who gives luscious fruits to the trees?

a) Fall ☐ b) summer ☐ c) winter ☐

**III. Fill in the blanks.**

**3x1=3m**

1. An \_\_\_\_\_ appeared before him.

2. She told him many interesting \_\_\_\_\_.

3. Blossoms are \_\_\_\_\_, \_\_\_\_\_ and red.

**IV. Match the words with similar meaning.**

**5x1=5m**

1. Beautiful a) difficult

2. Luscious b) big plants

3. Harsh c) nice

4. Answer d) ripe

**V. Arrange each group of words in the proper order.**

**3x1=3m**

1. Were of themselves they ashamed

\_\_\_\_\_

2. Mother him Rohit's scolded

\_\_\_\_\_

3. Went the grandmother apologised they to and

\_\_\_\_\_

**Y. M**

**Class- 5<sup>th</sup>**

**Name:**

**Formative Assessment-II**

**Sub: English**

**Roll no:**

**Time: 45min**

**Marks: 20**

**I. Answer the following questions.**

**3x2=6m**

1. What is the colour of the mountains?

A: \_\_\_\_\_

2. What did he tell all the animals?

A: \_\_\_\_\_

3. Why did the lion keeper had to return without the dog?

A: \_\_\_\_\_

**II. Tick (✓) the correct answer.**

**3x1=3m**

1. We tell with our \_\_\_\_\_.

a) eyes ☐      b) lips ☐      c) both ☐

2. The jackal was chased by some \_\_\_\_\_.

a) dogs ☐      b) cats ☐      c) people ☐

3. The manager threw the dog in the \_\_\_\_\_ cage.

a) tiger's ☐      b) elephant's ☐      c) lion's ☐

**III. Circle the verbs in the following sentences.**

**3x1=3m**

1. He killed him on the spot.

2. He entered a town.

3. He raised his head and howled back at them.

**IV. Join the words in column I with the words column II complete the words.**

**4x1=4m**

**Column -I**

**Column -II**

1. Class

ball

2. Foot

bow

3. Land

room

4. Rain

lord

**V. Complete the table.**

**4x1=4m**

I	II	III
Give		
Steal		
Touch		
bring		

**Y.M**

**Formative Assessment-II**

**Time: 45min**

**Class- 1<sup>st</sup>**

**Sub: Maths**

**Marks: 20**

**Name:**

**Roll no:**

**I. Write the number names of the following.**

**4x1=4m**

1. 42 = \_\_\_\_\_

2. 58 = \_\_\_\_\_

3. 94 = \_\_\_\_\_

4. 89 = \_\_\_\_\_

**II. Tick (✓) the biggest number and (x) the smallest number.**

**4x1=4m**

1. 48,32,31    2) 11,15,18    3) 44,13    4) 38,8,49

**III. Match the following.**

**4x1=4m**

12                  sixteen                  11

Fourteen

14                  Twelve                  16

Eleven

**IV. Write the ascending/descending order.**

**4x1=4m**

a) 15,345,27,19

\_\_\_\_\_

b) 28,50,39,40

\_\_\_\_\_

c) 76,80,63

\_\_\_\_\_

d) 53,11,71

\_\_\_\_\_

**V. Draw the correct number of beads.**

**4x1=4m**

Tens	ones

64

Tens	ones

41

Tens	ones

99

Tens	ones

20

Y.M  
Class- 2<sup>nd</sup>  
Name:

Formative Assessment-II  
Sub: Maths  
Roll no:

Time: 45min  
Marks: 20

**I. Word problems.**

2x2= 4m

1. Rahul had 18 toffees he ate 9 toffees. How many toffees were left with him?
2. There are 5 dogs each dog has 4 legs. How many legs are there altogether?

**II. Fill in the blanks.**

4x1=4m

1) If  $90 - 36 = \square$ , then  $36 + \square = 90$

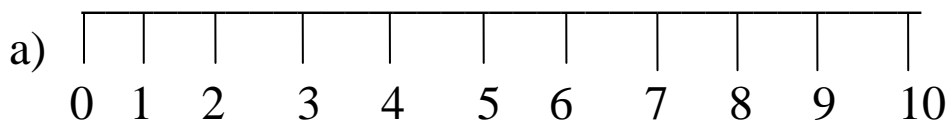
2)  $\square \times 5 = \square$

3)  $6 + 6 + 6 + 6 + 6 = \square \times \square = \square$

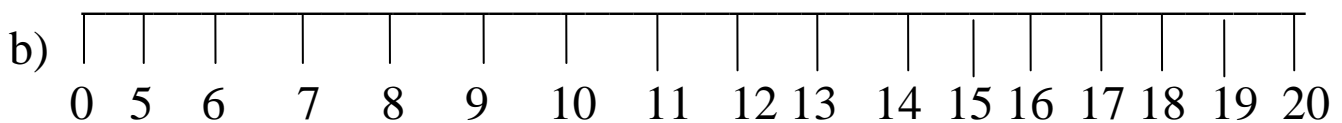
4)  $13 - 8 = \square$

**III. Multiply and subtract of the following numbers on the number line.**

2x2= 4m



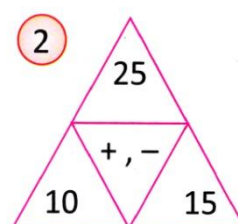
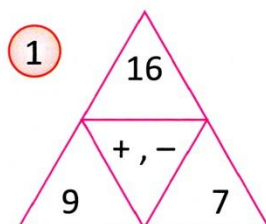
$2 \times 2 = \square$



$20 - 4 = \square$

**IV. Read the following addition and subtraction facts.**

2x2=4m



**V. Write 3 and 6 Tables.**

2x2= 4m

**Y.M**  
**Class- 3<sup>rd</sup>**  
**Name:**

**Formative Assessment-II**  
**Sub: Maths**  
**Roll no:**

**Time: 45min**  
**Marks: 20**

**I. Word problems.**

**3x2=6m**

1. There are 2136 eggs in a shop. out of these 1024 eggs had been sold?  
How many eggs are left in the shop?

2. There are 36 apples in a carton. How many apples are there in 4 such cartons?

3. In a school , there are 1245 boys and 1032 girls. How many students are there in that school.

**II. Fill in the blanks.**

**4x<sup>1/2</sup>=2m**

1.  $4 \times 6 =$  \_\_\_\_\_

2.   $\times 9 = 81$

3.  $0 + 4859 =$  \_\_\_\_\_

4.  $(125 + 126) + 40 = 125 + (126 + \text{_____})$

**III. Match the following.**

**4x1=4m**

1.  $10 \times 4$                        $7 \times 3$

2.  $6 \times 4$                       40

3.  $7 \times 5$                       24

4. 21                          35

**IV. Round to the nearest ten and hundred.**

**4x1=4m**

1) 44                      2) 658                      3) 71                      4) 854

**V. use the place value to solve the following.**

**2x1=2m**

i) a)  $58 - 23$                       b)  $76 - 38$

**ii) Find the product.**

**2x1=2m**

$$\begin{array}{r} 75 \\ \times 3 \\ \hline \end{array}$$

$$\begin{array}{r} 34 \\ \times 6 \\ \hline \end{array}$$



**Y.M**

**Class- 4<sup>th</sup>**

**Name:**

**Formative Assessment-II**

**Sub: Maths**

**Roll no:**

**Time: 45min**

**Marks: 20**

**I. Word problems.**

**3x2=6m**

1. A bicycle costs 3550/-. Find the cost of 328 bicycles.
2. The product of two numbers is 54255. If one of them is 15, find other Number.
3. Write all prime numbers between 80 and 100.

**II. Fill in the blanks.**

**4x<sup>1/2</sup>=2m**

1.  $9890 \times \underline{\hspace{2cm}} = 9890$
2.  $0 \div 27 = \underline{\hspace{2cm}}$
3. 10,20,30 next three multiplies         ,         ,
4. The first odd prime number is

**III. Find the LCM.**

**2x2=4m**

- 1) 6 and 9
- 2) 10, 15, and 20

**b) Find the 4 multiplies of the following numbers.**

**2x2=4m**

- a) 18
- b) 22

**IV. Divide the following.**

**2x2=4m**

- a. 14) 85220(
- b. 16) 7542 (

**Y.M**  
**Class- 5<sup>th</sup>**  
**Name:**

**Formative Assessment-II**  
**Sub: Maths**  
**Roll no:**

**Time: 45 min**  
**Marks: 20**

**I. Solve the sums.**

**3x2=6 m**

1. Three colour lamps glow at intervals of 10,12,and 15 seconds. After what time, all three bulbs will glow together.

2. Reema walked  $\frac{1}{2}$  kilometres and jogged  $\frac{5}{6}$  of a kilometre. How far did she go in all?

3. Cost of 5 books is  $2\frac{4}{8}$ . Find the cost of one book.

**II. Find the prime factors for the following numbers.**

**2x2=4 m**

1) 1728                  2) 826612

**III. Change the following in to improper and mixed fraction.**

**4x1=4m**

$9\frac{1}{17}$                    $\frac{11}{5}$                    $13\frac{13}{19}$                    $\frac{17}{5}$

**IV Arrange the following in ascending order/ descending order.**

**2x1=2m**

**Ascending order:**

$\frac{4}{6}$  ,  $\frac{6}{4}$  ,  $\frac{8}{10}$  ,  $\frac{1}{3}$  = \_\_\_\_\_

**Descending order:**

$\frac{1}{2}$  ,  $\frac{1}{6}$  ,  $\frac{3}{4}$  ,  $\frac{5}{6}$  = \_\_\_\_\_

**V. Find the product.**

**2x2=4 m**

1)  $12 \times \frac{9}{20}$

2)  $9\frac{1}{9} \div 41$



**I. Answer the following questions.**

**3x2=6m**

1. What is the use of kitchen?

A: \_\_\_\_\_

2. What does father bring from the market?

A: \_\_\_\_\_

3. What is the colour of your school uniforms?

A: \_\_\_\_\_

**II. Fill in the blanks.**

**3x1=3m**

1. A \_\_\_\_\_ generally has a big garden in its front.

2. We need \_\_\_\_\_ to cover our body.

3. We take a bath in our \_\_\_\_\_.

**III. Tick (✓) the correct answer.**

**3x1=3m**

1. A hut is a \_\_\_\_\_ house.

a) pucca ☐ b) kuchcha ☐ c) apartment ☐ d) bungalow ☐

2. Our parent get \_\_\_\_\_ when we help them.

a) happy ☐ b) unhappy ☐ c) trouble ☐ d) Sad ☐

3. We wear cotton clothes in \_\_\_\_\_

a) summer ☐ b) winter ☐ c) rainy season ☐ d) autumn ☐

**IV. Write 'T' for true 'F' for false.**

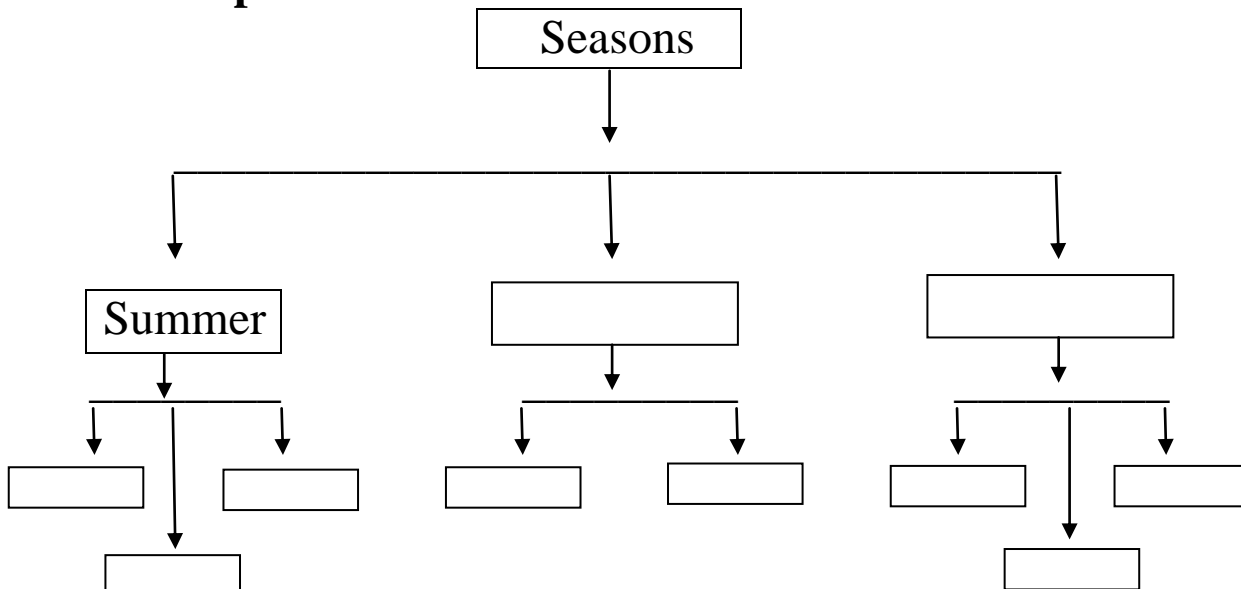
**3x1=3m**

1. House is the foremost need of a man ☐

2. We feel safe with our family members ☐

3. We wear cotton clothes in winter ☐

**V. complete the chart with clothes we wear different seasons. 5m**



**I. Answer the following questions.**

**3x2=6m**

1. What do you mean by protective food?

A: \_\_\_\_\_

2. Where does a birdling come out from?

A: \_\_\_\_\_

3. What do you understand by pets?

A: \_\_\_\_\_

**II. Fill in the blanks.**

**4x1=4m**

1. We \_\_\_\_\_ some vegetables to make them soft and tasty.

2. We use a \_\_\_\_\_ to clean our home.

3. A \_\_\_\_\_ is a place where people live.

4. A \_\_\_\_\_ is made of cement and wood.

**III. Tick (✓) the correct answer.**

**3x1=3m**

1. A house made of fabric is known as \_\_\_\_\_

a) tent ☐ b) igloo ☐ c) shack ☐ d) bungalow ☐

2. How do we keep our house?

a) Dirty ☐ b) clean ☐ c) Both ☐ d) None of these ☐

3. The eldest member of a family is called

a) Child ☐ b) father ☐ c) grandfather ☐ d) sister ☐

**IV. Write 'T' for true 'F' for false.**

**3x1=3m**

1. Caravans float on water ☐

2. Plants never grow older ☐

3. A house made of mud is a Kutcha house. ☐

**V. Look at the picture and write their names.**

**4x1=4m**



**I. Answer the following questions.**

**3x2=6m**

1. How can we keep our selves germ free?

A: \_\_\_\_\_

2. Why do living things need food?

A: \_\_\_\_\_

3. What are the functions of a root?

A: \_\_\_\_\_

**II. Tick (✓) the correct answer.**

**3x1=3m**

1. Brush your \_\_\_\_\_ twice a day.

a) Teeth ☐      b) shoes ☐

2. \_\_\_\_\_ gives birth to a new plant.

a) Seeds ☐      b) Buds ☐

3. Use a \_\_\_\_\_ crossing to cross the road.

a) tiger ☐      b) Zebra ☐

**III. Write two Examples.**

**4x1=4 m**

1) Natural things \_\_\_\_\_, \_\_\_\_\_

2) Stem we eat \_\_\_\_\_, \_\_\_\_\_

3) Animals that lay eggs \_\_\_\_\_, \_\_\_\_\_

4) Fruits with one seed \_\_\_\_\_, \_\_\_\_\_

**IV. Circle odd one out and write the reason.**

**3x1=3m**

1) banyan, pumpkin, peepal, neem

\_\_\_\_\_

2. root , leaves , fruits, flowers.

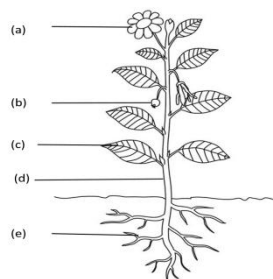
\_\_\_\_\_

3. mustard , cherry, cumin seeds, black pepper.

\_\_\_\_\_

**V. Write the names of the parts of plant.**

**4m**



**I. Answer the following questions.**

**3x2=6m**

1. Describe the importance of leaf for a plant briefly.

A: \_\_\_\_\_

2. Which feature helps a desert plant to survive there?

A: \_\_\_\_\_

3. Why does our body need proper rest and regular exercise?

A: \_\_\_\_\_

**II. Tick (✓) the correct answer.**

**3x1=3m**

1. During photosynthesis, plants produce \_\_\_\_\_

a) air and water ☐ b) sugar and oxygen ☐

2. Food helps us to \_\_\_\_\_

a) grow ☐ b) be healthy ☐ c) both ☐

3. The leaves have \_\_\_\_\_ to make food for the plant.

a) cells ☐ b) chlorophyll ☐

**III. Give two examples.**

**4x1=4m**

1) Breathing organ of the plant \_\_\_\_\_

2) Conifers \_\_\_\_\_

3) Kitchen of the plant \_\_\_\_\_

4) Desert plants \_\_\_\_\_

**IV. Write the meaning.**

**3x1=3 m**


1) Starch=

2) Aquatic plants=

3) Nutrients =

**V. write the names of parts of leaf.**

**4x1=4m**



**I. Answer the following questions.**

**3x2=6m**

1. Name the different stages of agriculture.

A: \_\_\_\_\_

2. How does heating and cooling affect the movement of particles?

A: \_\_\_\_\_

3. Give three differences between insects and mammals.

A: \_\_\_\_\_

**II. Fill in the blanks.**

**4x1/2=2 m**

1) \_\_\_\_\_ and \_\_\_\_\_ are sprayed over crops to prevent from pests.

2) particles are lightly packed in \_\_\_\_\_

3) A tortoise has \_\_\_\_\_ all over its body.

4) The seed coat \_\_\_\_\_ the seed.

**III. Tick (✓) the correct answer.**

**4x1=4m**

1. The \_\_\_\_\_ protect the baby plant inside the seed.

a) seed coat ☐ b) cotyledon on ☐

2. Metals expand on \_\_\_\_\_

a) Heating ☐ b) cooling ☐

3. Fishes swim with the help of \_\_\_\_\_

a) fins ☐ b) flippers ☐

4. \_\_\_\_\_ is a Rabi crop.

a) Wheat ☐ b) maize ☐

**IV. Define the following with examples.**

**2x2=4m**

1) Melting = \_\_\_\_\_

2) Evaporation = \_\_\_\_\_

**V. Write the difference between the following with given clues. 4m**

1) Rose and fern (type of reproduction)

\_\_\_\_\_

2) Rabi and Kharif crops (season)

\_\_\_\_\_

3) An almond and rice seed (cotyledons)

\_\_\_\_\_

4) Cotton and rice (soil)

\_\_\_\_\_



**I. Answer the following questions.**

**3x2=6m**

1. When are the following festivals Celebrated – Independence day, Republic Day and Gandhi Jayanti?

2. What is atmosphere?

3. How are maps more useful than a globe?

**II. Tick (✓) the correct answer.**

**3x1=3m**

1) India became a Republic in \_\_\_\_\_

a) 1950 ☐ b) 1960 ☐ c) 1944 ☐ d) 1956

2) We get oil used in cooking from \_\_\_\_\_

a) Oilseeds ☐ b) vegetables ☐ c) Oil rubber ☐ d) Sugarcane

3) What divides the Earth into two equal parts?

a) North pole ☐ b) south pole ☐ c) Equator ☐ d) None

**III. Fill in the blanks.**

**4x1=4m**

1) We need cotton to make \_\_\_\_\_.

2) Long, long ago, people used to think that the earth was \_\_\_\_\_

3) There are \_\_\_\_\_ continents in total.

4) Our Earth is made up of \_\_\_\_\_ and \_\_\_\_\_

**IV. Write 'T' for true 'F' for false.**

**4x1=4m**

1) Australia is the smallest continent

2) India is called the 'land of festivals'

3) Rearing fish in big tanks is called 'pisciculture.'

4) The earth is triangular in shape ☐

**V. Read the clues and complete the boxes.**

**3x1=3 m**

1. Rearing of fish.

P										
---	--	--	--	--	--	--	--	--	--	--

2. They are used to plough fields.

B							
---	--	--	--	--	--	--	--

3. The main occupation in our country.

F						
---	--	--	--	--	--	--

**I. Answer the following questions.**

**4x2=8m**

1. Explain the formation of soil.

A: \_\_\_\_\_

2. What do you mean by Kharif Crops?

A: \_\_\_\_\_

3. What is hydro – electricity?

A: \_\_\_\_\_

4. Where is ship-building industry located?

A: \_\_\_\_\_

**II. Tick (✓) the correct answer.**

**3x1=3m**

1. Where is fertiliser plant located?

a) Delhi ☐    b) Bhopal ☐    c) Mumbai    d) Sindri

2. People of India mostly consume.

a) jowar ☐    b) millet ☐    c) pulses    d) bajra

3. Which is not man –made source of water?

a) well ☐    b) canal ☐    c) Tank    d) Lake

**III. Write ‘T’ for true ‘F’ for false.**

**3x1=3m**

1) Large – Scale industries require highly skilled labours

2) Milk is a complete food ☐

3) Alluvial soil is very fertile ☐

**IV. Fill in the blanks.**

**3x1=3m**

1. Bpo is popularly known as \_\_\_\_\_

2. The highest dam in India is \_\_\_\_\_

3. \_\_\_\_\_ is the second most significant food crop in India.

**V. Write the names industries.**

**3x1=3 m**

**Cottage Industries**

**Large-Scale Industries**

\_\_\_\_\_

\_\_\_\_\_

\_\_\_\_\_

\_\_\_\_\_

\_\_\_\_\_

\_\_\_\_\_

**I. Answer the following questions.**

**4x2=8m**

1. How is the climate of Greenland?

A: \_\_\_\_\_

2. What is desert?

A: \_\_\_\_\_

3. What role does wind play in the climate of a place?

A: \_\_\_\_\_

4. Describe the importance of telegraph?

A: \_\_\_\_\_

**II. Tick (✓) the correct answer.**

**3x1=3m**

1. We can send and receive urgent messages through \_\_\_\_\_

a) Telegram ☐ b) newspaper ☐ c) radio

2. Which state experiences an extreme climate?

a) Goa ☐ b) Mumbai ☐ c) Delhi

3. The people of Greenland are called \_\_\_\_\_

a) polars ☐ b) Inuit ☐ c) Eskimos

**III. Fill in the blanks.**

**4x1/2=2m**

1. \_\_\_\_\_ is called 'liquid gold.'

2. Only small plants like \_\_\_\_\_ and \_\_\_\_\_ are grown in Greenland.

3. Men of Saudi Arabia wear \_\_\_\_\_.

4. Greenland has very \_\_\_\_\_ life

**IV. Write 'T' for true 'F' for false.**

**3x1=3m**

1. The amount of water in the air is called humidity.

2. UNI is an important news agency of America

3. The earth has been divided into three climatic Zones.

**V. Write the climatic or heat zones names of the earth. 4m**

