

Y.M

Formative Assessment-1

Class- 1st

Sub: English

Marks: 20

Name:

Roll no:

I. Answer the following questions.

3x2=6 m

1. What is your name?

A: _____

2. What should we eat less?

A: _____

3. How old are you?

A: _____

II. Fill in the blanks.

3x1=3m

1. His father works in the _____.

2. Fruits make you _____,
They make you _____ long.

3. Aayush studies in class _____.

III. Tick (✓) the correct answer.

3x1=3 m

1. Which family is a happy family?

a) Small family ☐ b) big family ☐ c) None ☐

2. What makes us live long?

a) Sweets ☐ b) chocolates ☐ c) fruits ☐

3. Where does his father work?

a) Office ☐ b) shop ☐ c) factory ☐

IV. Complete the words.

4x1=4 m

1. _____ ather.

2. Famil _____

3. _____ oman.

4. Schoo _____.

V. Match the opposites.

4x1=4 m

1. Big a. weak

2. Strong b. fast

3. Tall c. small

4. Last d. short

Y.M

Formative Assessment-1

Class- 2nd

Sub: English

Marks: 20

Name:

Roll no:

I. Answer the following questions.

3x2=6 m

1. What should we say if we meet a crocodile?

A: _____

2. Who was mischievous?

A: _____

3. What did the elephant do?

A: _____

II. Fill in the blanks.

4x1=4m

1. The monkey was in a _____ mood.

2. The saw a big _____ coming.

3. The monkey _____ and fell on the ground.

4. The second time the stone hit the elephant on the _____

III. Tick (√) the correct answer.

3x1=3 m

1. What will you say if you meet a crow?

a) Baa- Baa ☐ b. Coa- Coa ☐ c. Moo- Moo ☐

2. Who was wet all over?

a) Monkey ☐ b. Elephant ☐ c. Both ☐

3. What will you say if you meet a lamb?

a. caa-caa ☐ b. Baa-Baa ☐ c. Nothing ☐

IV. Match the following.

4x1=4 m

1. Crow

a) Bow-Wow

2. Cat

b) Mi- aow

3. Dog

c) Coo- coo

4. Dove

d) caw-caw

V. Write the past tense of the following.

3x1=3 m

1. meet _____

2. invite _____

3. run _____

Y.M
Class-3rd
Name:

Formative Assessment-1
Sub: English
Roll no:

Marks: 20

I. Answer the following questions.

3x2=6m

1. What kind of woman was she?

A: _____

2. What promise did the tiger make to the man?

A: _____

3. What was the old man making?

A: _____

II. Fill in the blanks.

4x1=4m

1. He added salt and _____ to the shop.

2. The tiger was _____.

3. The old man was good _____.

4. Never break your _____.

III. Tick (✓) the correct answer.

3x1=3 m

1. What was not put in the soup?

a) Onion ☐ b) potato ☐ c) Tomato ☐

2. The tiger was _____

a) grateful ☐ b) ungrate ful ☐ c) both ☐

3. The man saw a _____

a) Lion ☐ b) fox ☐ c) tiger ☐

IV. Match the following.

4x1=4 m

1. Everything

a) less

2. Foolish

b) unfair

3. More

c) nothing

4. Fair

d) intelligent

V. Rewrite the sentences for the following.

3x1=3m

1. The tiger will stay in the cage forever.

2. The man will open the door of the cage.

3. The fox will put the tiger back in the cage.

Y.M

Formative Assessment-1

Class-4th

Sub: English

Marks: 20

Name:

Roll no:

--

I. Answer the following questions.

3x2=6 m

1. What did the king want to do?

A: _____

2. What do little children never do?

A: _____

3. Who became the successor of the king?

A: _____

II. Fill in the blanks.

4x1=4m

1. He loved his _____ clearly.

2. Never do these gentle _____ wrong.

3. They were _____ and _____.

4. Little children, never give _____ to things that feel and live.

III. Tick (✓) the correct answer.

3x1=3 m

1. The sparrow comes for:

a) Water ☐ b) grains ☐ c) crumbs ☐

2. The first prince had brought.

a) jewels ☐ b) horse ☐ c) luxurious articles ☐

3. Where does a hare live?

a) Den ☐ b) shed ☐ c) Lair ☐

IV. Match the words with their meanings.

4x1=4 m

1. Search a) small

2. Little b) answer

3. Reply c) find

4. Kind d) gentle

V. Write the rhyming words.

3x1=3 m

1. wrong –

2. Come –

3. Play _

Y.M

Formative Assessment-1

Class-5th

Sub: English

Marks: 20

Name:

Roll no:

I. Answer the following questions.

3x2=6 m

1. What did the princess want?

A: _____

2. Why did the clever men refuse to face the king?

A: _____

3. Was the court jester wise or foolish?

A: _____

II. Fill in the blanks.

3x1=3m

1. It is _____ to get the moon.

2. He ran out to give the happy _____ to the king.

3. The _____ became very sick.

III. Tick (✓) the correct answer.

4x1=4 m

1. _____ was the trickiest man.

a) The king ☐ b) The minister ☐ c) Shankar ☐

2. The princess was _____ years old.

a) ten ☐ b) eight ☐ c) twenty ☐

3. He called his _____

a) Sons ☐ b) wife ☐ c) ministers ☐

4. What did the princess want?

a) The moon ☐ b) The sky ☐ c) The sun ☐

IV. Make nouns from the following adjectives.

3x1=3 m

1. Wise _____

2. Strange _____

3. Warm _____

V. Write the opposites words.

4x1=4m

1. Appear X _____

2. Clever X _____

3. Trained X _____

4. Slave X _____











Y.M
Class-1st
Name:

Formative Assessment-1
Sub: Maths
Roll no:

Marks: 20
























I. Write 'H' for heavy and 'L' for light objects.

4x1=4 m

1.   2.   3.  
4.   5.  

II. Write Symbols of > , < or =:

4x1=4 m

1.   
2.    
3.      
4.       
  


















III. Match the following.

4x1=4 m

3 one
1 three
5 Eight
8 Five

IV. Count and write the number in each box.

4x1=4 m

1.     =
2.     =
    =
3.   =
4.    =

V. Write the number comes before/ between/ after.

4x1=4m

9 8 10 4
 7 7 9 5

Y.M
Class-2nd

Formative Assessment-1

Sub: Maths

Marks: 20

Name:

Roll no:

I. Solve the sums.

2x2=4m

i) Write the number names.

a. 169 _____

b. 113 _____

ii) Write the numeral for the given number-names?

a. One hundred seventy-one _____

b. One hundred eight-four _____

II. Add the following.

4x1=4m

1.	T	O		T	O		T	O		T	O		
	3	8		5		1	9		7	8			
	+	4	1		8		2	4		5	5		
	<div></div>			+	3		+	3	5		+	1	3
	<div></div>				<div></div>			<div></div>				<div></div>	

III. Fill in the blanks.

4x1=4m

1. $100+30+7 =$ _____

2. 19 ones = ten+ ones.

3. C is the _____ letter in MATHEMATICS.

4. 1 hundred + 4 tens + 6 ones= _____.

IV. Write the following in increasing order/decreasing order.

2x2= 4 m

1. Increasing order:

996,230,755,329,828 _____, _____, _____, _____, _____

2. Decreasing order:

220,105,962,888,610 _____, _____, _____, _____, _____

V. Word problem.

4m

1. There are 12 oranges, 17 apple and 25 bananas, Find the total number of fruits?

Y.M
Class-3rd

Formative Assessment-1

Sub: Maths

Marks: 20

Name:

Roll no:

I. Solve the sums.

4m

a) Write the following in Hindu Arabic numeral.

VI = _____ XVI = _____ L = _____ XXX = _____

b) Write the following number is odd or even.

27 = _____ 16 = _____ 11 = _____ 24 = _____

II. Write the predecessor and the successor of the following.

4m

Predecessor	Number	Successor
	2 4 8 5	
	5 4 1 8	
	3 4 6 5	
	5 6 4 8	

III. Write the greatest and smallest –digit number.

4m

Greatest Smallest

1. 7 , 0, 1, 9 _____, _____
2. 6, 2, 8, 0 _____, _____

IV. Fill in the blanks.

4m

1. 621, _____, _____, 624, _____, _____
2. 210, _____, _____, 240, _____, _____
3. 200, _____, 202, _____, 204, _____
4. 992, _____, _____, _____, 997

V. Put >, < or = in the boxes.

4m

1. $200+200 \square 500$

2. $4 \times 5 \square 5 \times 4$

3. $50+5 \square 60-5$

4. $400+2 \square 300$

Y.M

Class-4th

Name:

Formative Assessment-1

Sub: Maths

Roll no:

Marks: 20

--

I. Solve the sums.

6m

1. A shop selling a mobile for 4592/-. What is the cost of mobile if its cost is rounded to nearest 1000?
2. There are 8,435 Cows, 7,944 buffaloes and 28,562 goats in a farm. How many total cattle are there in the farm?
3. Rohan subtracted a number from 542496 and got 124987 as the answer. Which number did Rohan subtract?

II. Write the expanded from.

2m

1. 92,427 _____
2. 6, 43,702 _____

III. Arrange the following Roman Numerals in ascending order.

4m

1. II, XXIII, XVI, IX, XXII _____
2. XXIX, I, XX, XXV _____

IV. Fill in the blanks.

4m

1. _____ XIX _____.
2. $90,000+700+20+7$ _____.
3. The smallest 5-digit number formed by 3,9,1,4,5 _____.
4. _____+279= 279+642.

V. Write these numbers in figures to put commas at proper places.

4m

1. Sixty-eight thousand nine _____
2. Eight lakh eight thousand thirty two _____
3. Twenty- five thousand eight hundred ninety seven _____
4. Seven lakh eight hundred ninety four _____

Y.M
Class-5th

Formative Assessment-1

Sub: Maths

Marks: 20

Name:

Roll no:

I. Solve the sums.

3x2=6m

1. John owed 1, 68,38,976 to prem in the beginning of the year. He repaid 35,76,287/- by the end of the year. How much amount has he still to pay to prem?

2. Write each of the following numbers in words.

a) 5,00,87,238 b) 97,43,266

3. Separate into according to the international system of numeration?

i) 78931086 ii) 81987169

II. Simplify the following.

2x2=4m

1. 3, 51,28,612- 1,23,62,169+1,23,65,182

2. 7,78,35,238+1,66,73,218-6,12,38,816-16,12,386

III. Evaluate the following.

2x2=4 m

1. $75 \times 25 \div 25 + 5 - 25$.

2. If 50 is divided by 25, and quotient is multiplied by 71, what number do we get?

IV. Fill in the boxes with > or <, = .

4x1=4 m

1. XLIII LXIII

2. 53,76,200 53,75,800

3. XCVI LXVI

4. 51,00,543, 53,75,800

V. Write the expanded form of the following.

2x1=2m

1. 3,19,40,156 _____

2. 6,40,30,147 _____

Y.M

Formative Assessment-1

Class- 1st

Sub: EVS

Marks: 20

Name:

Roll no:

I. Answer the following questions.

3x2=6 m

1. Write the food items you like to eat in your breakfast?

A: _____

2. How many toes do we have?

A: _____

3. Which part of our body helps us to see?

A: _____

II. Fill in the blanks.

4x1=4m

1. We all need _____ for life.

2. I have _____ mouth (one/two) I eat with my mouth.

3. Our body has _____ sense organs.

4. We eat _____ at night.

III. Tick (✓) the correct answer.

4x1=4m

1. We get energy from _____

a) Water ☐ b) food ☐ c) exercise ☐ d) play ☐

2. We have _____ ears.

a) One ☐ b) two ☐ c) three ☐ d) four ☐

3. We feel with our _____

a) Skin ☐ b) tongue ☐ c) eyes ☐ d) nose ☐


4. We eat meals every day.

a) Two ☐ b) three ☐ c) four ☐ d) five ☐

IV. Match the following.

4x1=4 m

1. Rice

a) 

2. Cauli flower

b) 

3. Eggs

c) 

4. Ice-cream

d) 

V. Write 'T' for true 'F' for false.

2x1=2m

1. Our head is covered with hair ☐

2. We smell with our eyes. ☐

Y.M

Formative Assessment-1

Class- 2nd

Sub: EVS

Marks: 20

Name:

Roll no:

I. Answer the following questions.

3x2=6m

1. What are the three types of families?

A: _____

2. What do you understand by hobbies?

A: _____

3. Who are called vegetarians?

A: _____

II. Fill in the blanks.

4x1=4m

1. A small family has _____ members.

2. Madan's hobby is _____ collection.

3. Water helps us to _____ food.

4. A big family has _____ and more than _____ kids.

III. Tick (✓) the correct answer.

3x1=3 m

1. A _____ family is an extended family.

a) Joint ☐ b) middle ☐ c) small ☐ d) big ☐

2. Potato is a/an _____ food.

a) body-building ☐ b) energy-giving ☐ c) protective ☐ d) all ☐

3. Mainly there are _____ types of families.


a) Two ☐ b) three ☐ c) four ☐ d) five ☐

IV. Match the following.

4x1=4 m

1.  a. Painting

2.  b. Writing

3.  c. Cricket.

4.  d. Singing

V. Write 'T' for true 'F' for false.

2x1=2m

1. A big family is not called a happy family ☐

2. Hobbies keep us relaxed ☐

3. It is hygienic to eat food road side shops ☐

Y.M

Formative Assessment-1

Class- 3rd

Sub: Science

Marks: 20

Name:

Roll no:

I. Answer the following questions.

3x2=6m

1. How are muscles useful to us?

A: _____

2. What are the different types of fibres and their sources?

A: _____

3. What is the importance of regular exercise?

A: _____

II. Fill in the blanks.

4x1=4m

1. _____ pumps blood to all other parts.

2. _____ are killed by the sunlight.

3. The _____ is the master organ of our body.

4. A small family can manage in a _____ house.

III. Tick (✓) the correct answer.

3x1=3 m

1. _____ is found in colder regions.

a) Kutcha house ☐ b) Igloo ☐

2. The _____ clean blood waste from the body.

a) Kidneys ☐ b) liver ☐

3. _____ of the house affects our health.

a) Sanitation ☐ b) construction ☐

IV. Match the following.

4x1=4 m

1. Early man

a) Tongue

2. Silk worm

b) skin of animals

3. Taste buds

c) liquid in mouth

4. Saliva

d) silk

V. Give one word answer.

3x1=3 m

1. They throw out urine _____

2. A structure made to live in _____

3. It flows in the tubes of the body _____

Y.M

Formative Assessment-1

Class- 4th

Sub: Science

Marks: 20

Name:

Roll no:

I. Answer the following questions.

3x2=6m

1. What do you understand by the term 'adaption'?

A: _____

2. Describe the structure of an egg?

A: _____

3. Write the difference between herbivores, carnivores and omnivores?

A: _____

II. Fill in the blanks.

4x1=4m

1. Crab is an _____ animal.

2. _____ is the process of producing young ones.

3. Animals with a _____ are called 'Vertebrates'.

4. The young ones of insects look _____ from their adults.

III. Give one word answer.

4x1=4m

1. Animals that live on land _____

2. Hard covering that protects the eggs _____

3. Animals that eat both flesh and plants _____

4. The process of keeping eggs warm _____

IV. Match the following.

4x1=4 m

Column-I

Column-II

1. Salamander

a) Parasite

2. Vulture

b) Terrestrial Animal

3. Mosquito

c) Scavenger

4. Tiger

d) Amphibian

V. Understand the relationship and complete the following.

2m

1. Fish's eggs: spawn: Frog's eggs _____.

2. Birds: lay eggs in nest: lay eggs in nest: crocodile _____

Y.M

Formative Assessment-1

Class- 5th

Sub: Science

Marks: 20

Name:

Roll no:

I. Answer the following questions.

3x2=6 m

1. Describe the different kinds of muscles in a human body?

A: _____

2. Write some safety rules to be followed on road?

A: _____

3. What is the function of skeleton system?

A: _____

II. Fill in the blanks.

4x1=4m

1. The _____ is in the shape of 's'.

2. The _____ used for cooking is L. P.G.

3. Ligaments join bones to _____.

4. Never-use _____ appliances with wet hands.

III. Match the following.

4x1=4 m

Column-1

Column-2

1. Bone marrow

a) Fracture

2. Medulla

b) snake bite

3. Poisonous

c) bone

4. Crack in bone

d) carry messages.

IV. Name the type of joint present in these body parts.

4x1=4 m

1. Shoulder _____

2. Wrist _____

3. Elbow _____

4. Knee _____

V. Give two examples each of the following.

2x1=2m

1. Reasons behind burning _____, _____

2. Things that cause fire if carelessly handled _____, _____

Y.M

Formative Assessment-1

Class- 3rd

Sub: Social

Marks: 20

Name:

Roll no:

I. Answer the following questions.

3x2=6m

1. Name the crop grown in our country?

A: _____

2. What do men and women in Kashmir wear?

A: _____

3. Who are veterinary doctor's?

A: _____

II. Fill in the blanks.

4x1=4m

1. Spices make our food _____.

2. The cap of _____ is very famous for its embroidery.

3. We should follow _____ to avoid accident.

4. The main food grains are wheat, _____, _____

III. Write 'T' for true 'F' for false.

4x1=4m

1. Grapes grow in winter. ☐

2. People wear special clothes on festivals. ☐

3. A person cannot do all activities alone. ☐

4. Wheat, rice and maize are food grains. ☐

IV. Match the following.

4x1=4m

Column-I

Column-II

1. Urad, arhar

a) Kerala

2. Mundu-blouse

b) Beverages

3. Veterinary doctor

c) pulses

4. Tea and coffee

d) treat animals

III. Tick (✓) the correct answer.

2x1=2m

1. Where are coconuts grown?

a) Coastal areas ☐ b) Hilly areas ☐ c) plain areas ☐ d) None ☐

2. Tribal people wear ☐ _____.

a) traditional dresses b) dhoti –kurta ☐ c) achkan ☐ d) saree ☐

Y.M

Formative Assessment-1

Class- 4th

Sub: Social

Marks: 20

Name:

Roll no:

I. Answer the following questions.

3x2=6m

1. What are the physical division of India?

A: _____

2. Define 'Basin'?

A: _____

3. What do you mean by 'seven sisters'?

A: _____

II. Fill in the blanks.

4x1=4m

1. India is divided into _____ states.

2. _____ is called the 'Apple state of India'.

3. A pass is a _____ gap in the mountains.

4. Bay of Bengal lies in the _____ of India.

III. Write 'T' for true 'F' for false.

4x1=4m

1. Sutlej river originates from Gangotri glacier. ☐

2. The word 'Himalaya' mean by snow. ☐

3. In Delhi people speak only English. ☐

4. New Delhi is the capital of India. ☐

IV. Match the following.

4x1=4 m

Column-I

Column-II

Hyderabad

a. highest peak

Number of UTS

b. Narrow gap in the mountain.

Mount Everest

c. 8

A pass

d. Capital of Telangana

V. Tick (✓) the correct answer.

2x1=2m

1. India is surrounded by the Arabian sea in the _____.

a) South ☐ b) west ☐ c) North ☐ d) East ☐

2. The very fertile _____ is called alluvium.

a) Sand ☐ b) silt ☐ c) rocks ☐

Y.M

Formative Assessment-1

Class- 5th

Sub: Social

Marks: 20

Name:

Roll no:

I. Answer the following questions.

3x2=6m

1. What is International Date Line?

A: _____

2. What are signs and symbols used on a map?

A: _____

3. Describe the climate of the prairies?

A: _____

II. Fill in the blanks.

4x1=4m

1. The Earth's axis is on _____ line.

2. Directions are always measured from_____.

3. The main produce of Northern prairies is _____.

4. The British Royal observatory is located in _____.

III. Write 'T' for true 'F' for false.

4x1=4m

1. The shortest latitude is the Equator.

☐

2. There are four sub-directions

☐

3. The big barns used to store wheat are called 'silos.'

☐

4. The Earth has five continents and seven oceans

☐

IV. Match the following.

4x1=4 m

1. Africa

a) prairies

2. Asia

b) Pampas

3. North America

c) Velds

4. South America

d) steppes

V. Mark the all missing direction in the adjacent figure.

2m

